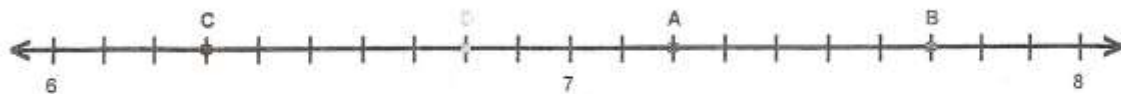


Name : _____ Score : _____

Teacher : _____ Date : _____

Decimal Numbers on Number Lines



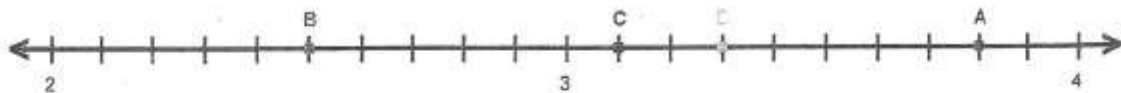
A = _____ B = _____ C = _____ D = _____



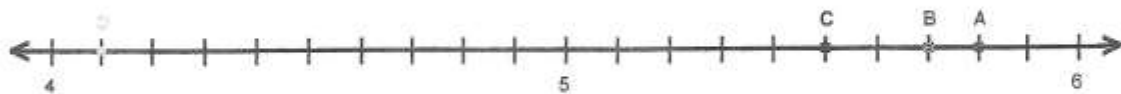
A = _____ B = _____ C = _____ D = _____



A = _____ B = _____ C = _____ D = _____



A = _____ B = _____ C = _____ D = _____

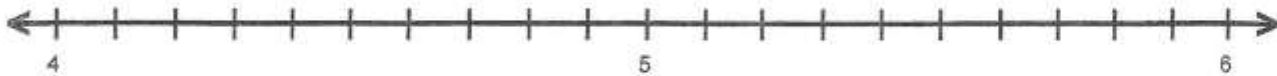


A = _____ B = _____ C = _____ D = _____

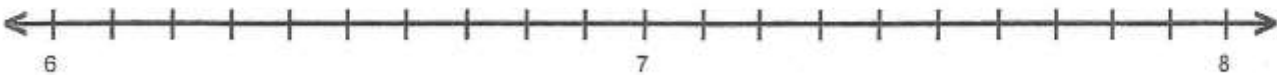
Name : _____ Score : _____

Teacher : _____ Date : _____

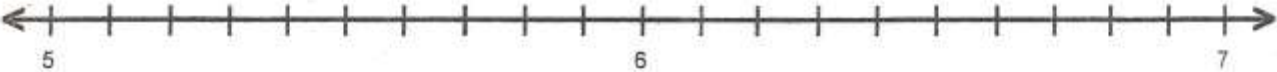
Decimal Numbers on Number Lines



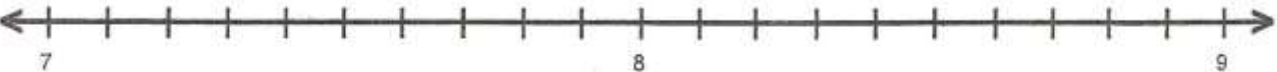
A = 5.3 B = 5.1 C = 4.6 D = 5.4



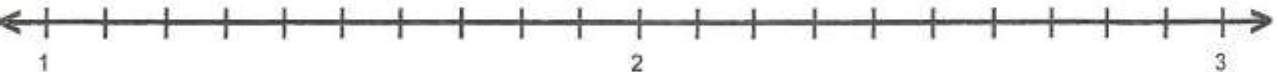
A = 7.9 B = 7.7 C = 6.1 D = 6.3



A = 5.1 B = 6.3 C = 5.8 D = 5.2



A = 8.5 B = 7.6 C = 7.8 D = 7.7



A = 2.6 B = 2.8 C = 2.2 D = 1.3